





# Math Worksheets

## Subtraction Equations




Look at the number of objects below and write the subtraction equation below it.



\_\_\_\_\_ - \_\_\_\_\_ = \_\_\_\_\_



\_\_\_\_\_ - \_\_\_\_\_ = \_\_\_\_\_



\_\_\_\_\_ - \_\_\_\_\_ = \_\_\_\_\_