




Math Worksheets

Subtraction Equations


Look at the number of objects below and write the subtraction equation below it.



-



=






-




=





-



=

